



**PREDICTED
PAPER**



[Video Solutions](#)

Centre Number	<input type="text"/>	<input type="text"/>	<input type="text"/>	<input type="text"/>	<input type="text"/>	Candidate Number	<input type="text"/>	<input type="text"/>	<input type="text"/>	<input type="text"/>
Surname	_____									
Forename(s)	_____									
Signature	_____									

GCSE MATHEMATICS

H

Higher Tier Paper 1 Non-Calculator

Friday 20 May 2022

Morning

Time allowed: 1 hour 30 minutes

Student Self Reflection

Topics I need to **revise**

Topics I need to **learn**

Silly Mistakes?

Target mark for next time

For teacher use	
Pages	Mark
2-3	
4-5	
6-7	
8-9	
10-11	
12-13	
14-15	
16-17	
18-19	
20-21	
22-23	
24	
TOTAL	





Answer **all** questions in the spaces provided.

Do not write
outside the
box

1 Circle the decimal that is closest in value to 3.019

Circle your answer.

[1 mark]

3.2

3.01

3.025

3.19

2 What is 1.4cl as a fraction of 80ml

Circle your answer.

[1 mark]

$\frac{7}{4}$

$\frac{7}{40}$

$\frac{4}{7}$

$\frac{40}{7}$

3 A transformation is performed on shape A giving the image B.

Shape A and the image B are **not** congruent.

What was the type of transformation?

Circle your answer.

[1 mark]

Rotation

Reflection

Translation

Enlargement





Do not write
outside the
box

4 Simplify $3b + 2b \times b - b^2$

Circle your answer.

[1 mark]

$4b^2$

$3b + b^2$

$5b^3 - b^2$

$6b^3 - b^2$

5 Dan can paint 4 fence panels every 2 hours.
Liz can paint 1 fence panel every 15 minutes.

A garden has 21 fence panels.

Working together, how long will it take Dan and Liz to paint the panels?

Give your answer in hours.

[3 marks]

Answer _____ hours

Turn over ►





Do not write
outside the
box

6 (a) Work out $\left(\frac{2}{3}\right)^2 + \frac{1}{4}$

[3 marks]

Answer _____

6 (b) Write $2^{20} \div (2^3)^4$ as a single power of 2.

[2 marks]

Answer _____

6 (c) Write 0.0042 in standard form.

[1 mark]

Answer _____

6 (d) Work out $(4 \times 10^3) \times (3 \times 10^5)$ giving your answer in standard form.

[2 marks]

Answer _____





Do not write
outside the
box

7 Solve $\frac{x}{4} + 9 = 3$

[2 marks]

$x =$ _____

8 The cost of a calculator is £3.60

The cost of a pen is 80p

Write the cost of a calculator to the cost of a pen.

[2 marks]

Give your answer in simplest form.

Answer _____ : _____

12

Turn over ►





Do not write
outside the
box

9 ABCDEF is a regular hexagon.

Using only ruler and compasses, show the region inside the hexagon that is

less than 5.5 cm from E

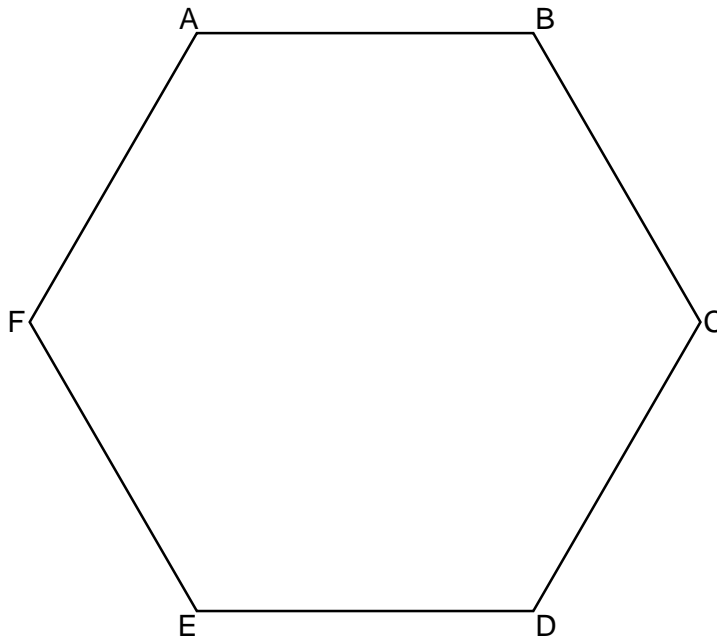
and

closer to point C than point D

Label the region R.

Show all your construction lines.

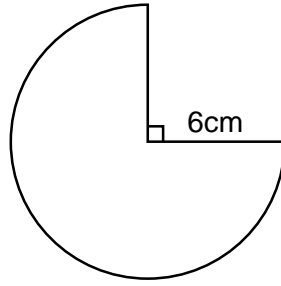
[3 marks]





Do not write
outside the
box

10 The diagram shows a sector of a circle of radius 6cm.



Not drawn
accurately

Calculate the area of the sector.

Give your answer in terms of π .

[3 marks]

Answer _____

$\frac{\quad}{6}$

Turn over ►

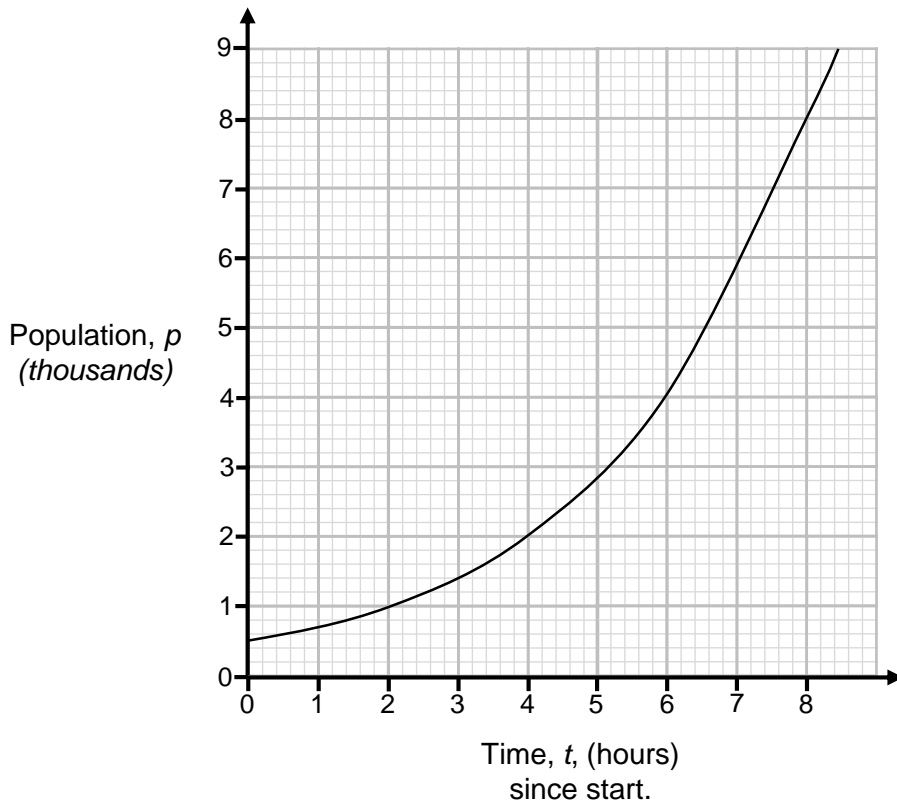




Do not write
outside the
box

11 The population, p , of bacteria in a sample is recorded at different times.
 t represents the number of hours since the timing started.

At the start the population was 500.



11 (a) Use your graph to calculate how many bacteria were in the sample after 5 hours. [2 marks]

Answer _____

11 (b) What type of graph is shown above. [1 mark]

Circle your answer.

Exponential

Reciprocal

Cubic

Quadratic





Do not write
outside the
box

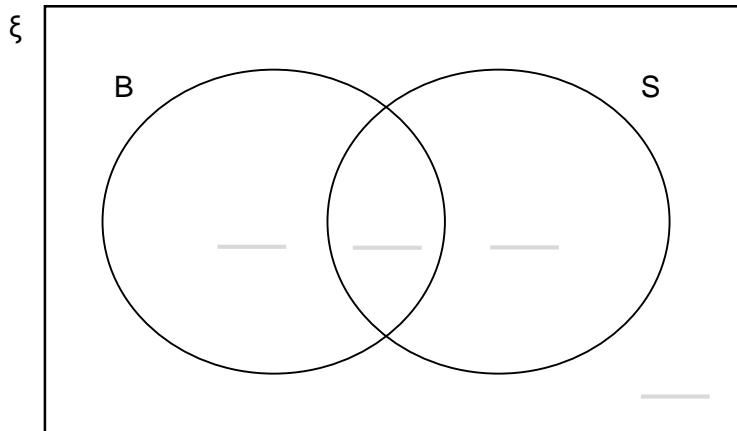
12 The Venn Diagram below show information about 200 students.

Each of the students was asked if they have any brothers or sisters.

$\frac{3}{8}$ of the students had brothers and sisters.

In total 105 students had sisters.

The number of students with brothers was 15 less than the number who had sisters.



Complete the Venn Diagram.

[4 marks]

$\frac{7}{7}$





Do not write
outside the
box

13 (a) Factorise $x^2 - 36$

[1 mark]

Answer _____

13 (b) Simplify fully

$$\frac{2x^2 - 19x + 42}{x^2 - 36}$$

[3 marks]

Answer _____

13 (c) Here is an identity

$$6(ax + 4) + 10 \equiv 3x - 2b$$

Work out the values of a and b

[3 marks]

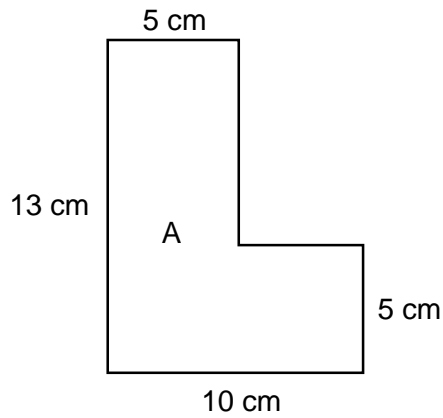
$a =$ _____ $b =$ _____





Do not write
outside the
box

- 14 Shape A below is the 2D cross-section of a prism.
The prism has length 5cm



Not drawn
accurately

- 14 (a) Write down how many of the faces of the prism will be squares.

[1 mark]

Answer _____

- 14 (b) Write down how many of the faces of the prism will **not** be squares.

[1 mark]

Answer _____

$\frac{\quad}{9}$

Turn over ►





Do not write
outside the
box

15 a is increased by 10% to give b .

b is then increased by 20% to give c .

Write down a single decimal multiplier for the overall increase from a to c

[2 marks]

Answer _____

16 Which one of the following equations represents a straight line graph?

Circle your answer.

[1 mark]

$$y = 2x^2 + 4$$

$$x + y = 3^2$$

$$y = \frac{1}{x-2}$$

$$y = 20 - \frac{1}{x}$$





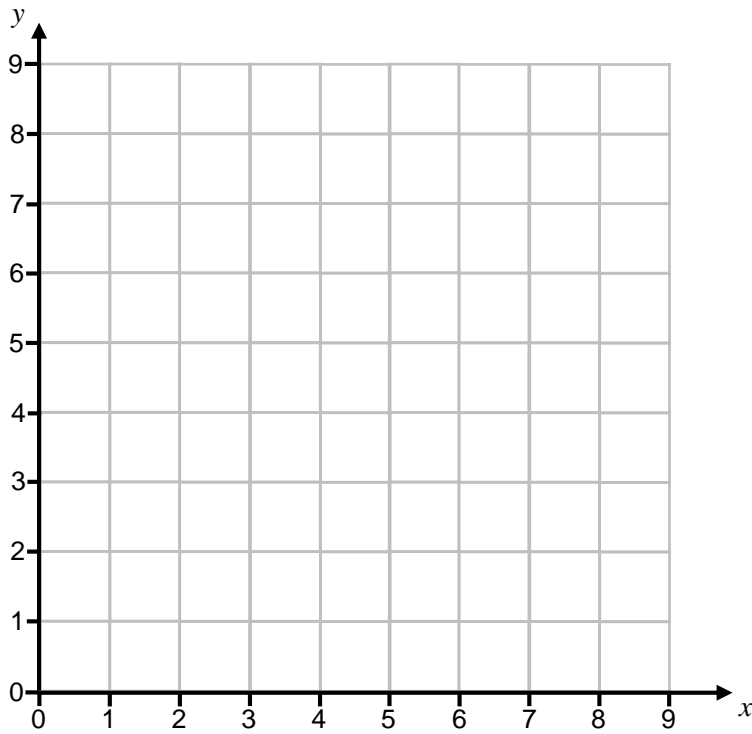
Do not write
outside the
box

17 On the grid, identify the region represented by

$$x > 2 \quad y > 1 \quad x + y \leq 8$$

Label the region R.

[3 marks]



$\frac{\quad}{6}$

Turn over ►





Do not write
outside the
box

18 Convert $0.\dot{4}7$ to a fraction.

[3 marks]

Answer _____

19 The first term of an arithmetic sequence is equal to $3a + b$

The fourth term of the sequence is equal to $15a - 5b$

Write an expression for the 5th term of the sequence.

[3 marks]

$3a + b$ $15a - 5b$

Answer _____





Do not write outside the box

20 Rafa takes a journey in two parts shown in the diagram below.

[3 marks]



Not drawn accurately

The distance between A and B is 20 miles.

The distance between B and C is 40 miles.

Rafa travels at 30mph between A and B and then 50mph between B and C.

Calculate how long his journey from A to C took in minutes.

Answer _____

21 Rearrange $t = \frac{4}{a} + \sqrt{n}$ to make a the subject

[3 marks]

Answer _____

Turn over ►



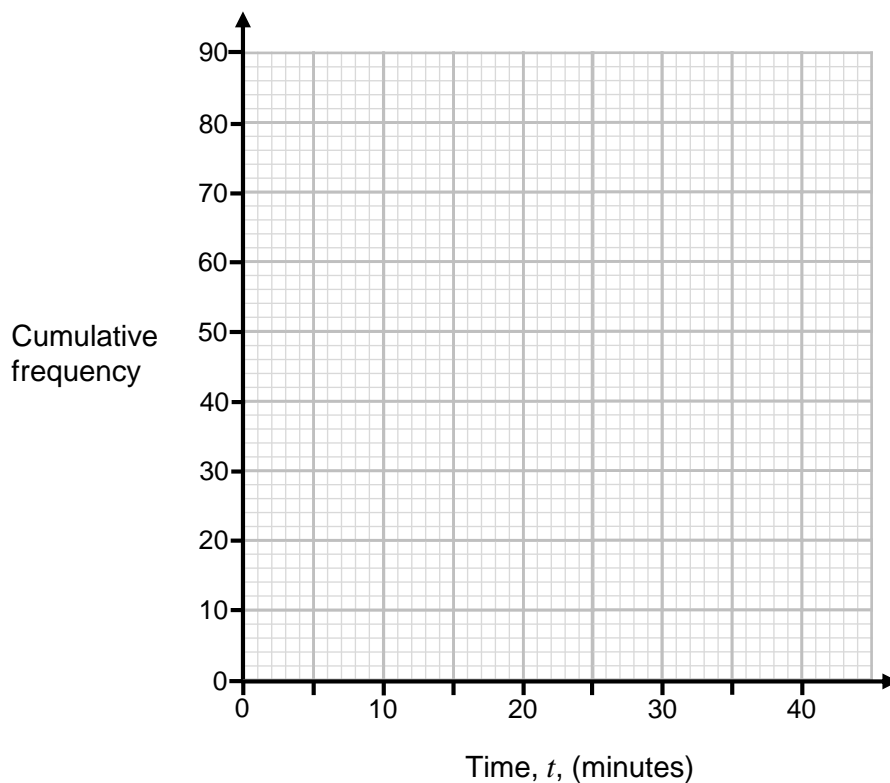


22 Here is some information about how long 80 people spent shopping.

Time, t , (minutes)	Frequency
$0 < t \leq 10$	20
$10 < t \leq 20$	32
$20 < t \leq 30$	18
$30 < t \leq 40$	10

22 (a) Draw a cumulative frequency graph of the information.

[3 marks]





Do not write
outside the
box

22 (b) Those who shopped for less than 25 minutes spent an average of £5.00 each.
Calculate an estimate for the total amount of money spent by these shoppers.

[2 marks]

Answer _____

Turn over for next question

$\frac{\quad}{5}$

Turn over ►





Do not write
outside the
box

23 On her journey to work Helen passes through two sets of traffic lights.

The probability that the first set of traffic lights is green is $\frac{2}{10}$

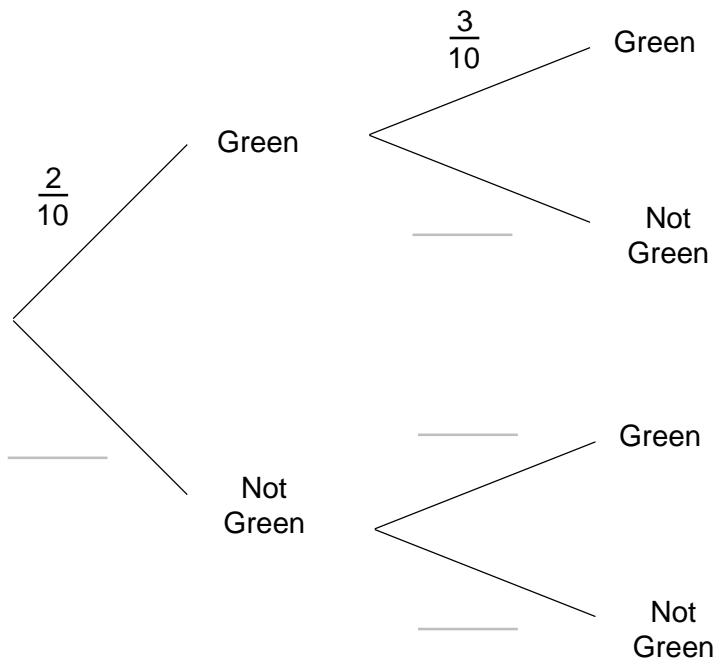
The probability that the second set of traffic lights is green is $\frac{3}{10}$

23 (a) Complete the tree diagram

[2 marks]

First Traffic Lights

Second Traffic Lights





Do not write
outside the
box

23 (b) Calculate the probability that **at least** one of the traffic lights is green on Helen's way to work.

[3 marks]

Answer _____

Turn over for next question

$\frac{\quad}{5}$

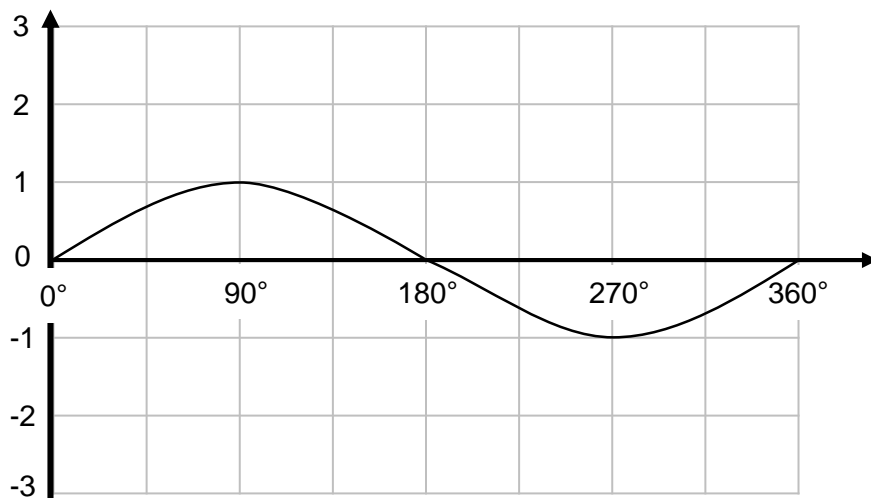
Turn over ►





Do not write
outside the
box

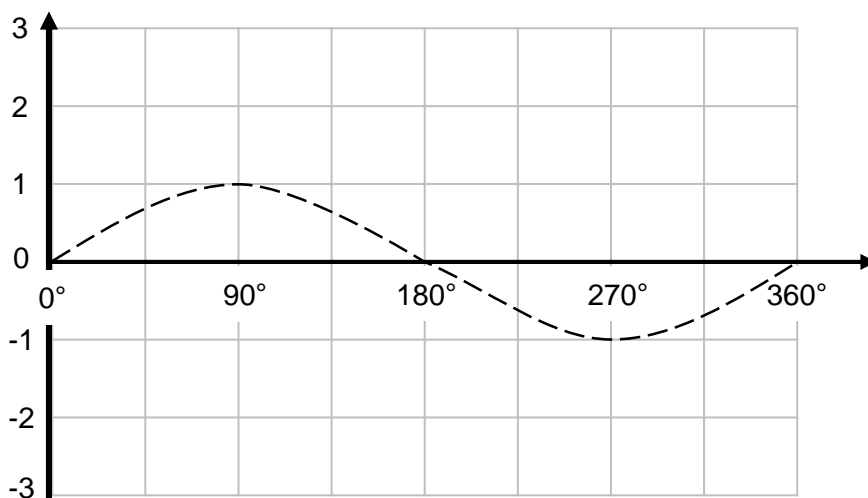
24 Here is the graph of $y = \sin x$ for $0^\circ \leq x \leq 360^\circ$



In parts (a) and (b) the graph of $y = \sin x$ is shown as a dashed line.

24 (a) On the grid below sketch the graph of $y = \sin 2x$ for $0^\circ \leq x \leq 360^\circ$

[1 mark]

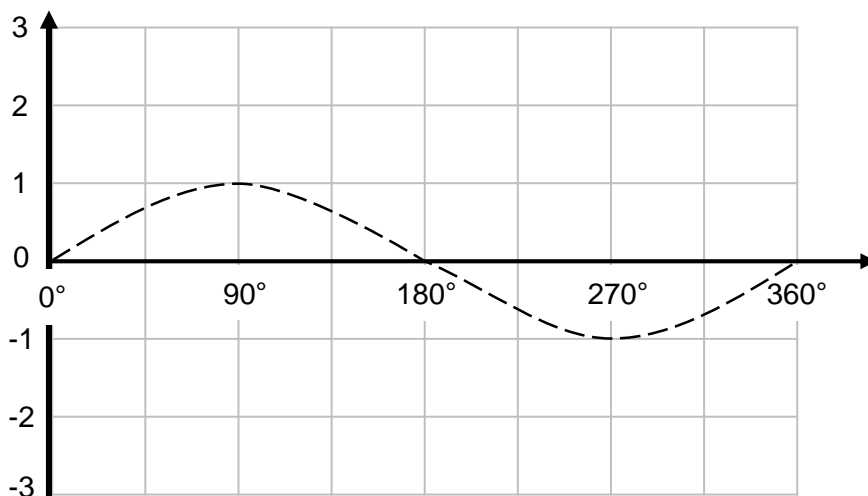




Do not write
outside the
box

24 (b) On the grid below sketch the graph of $y = 2\sin x$ for $0^\circ \leq x \leq 360^\circ$

[1 mark]



Turn over for next question

$\frac{1}{2}$

Turn over ►





Do not write
outside the
box

25 PQRS is a parallelogram.

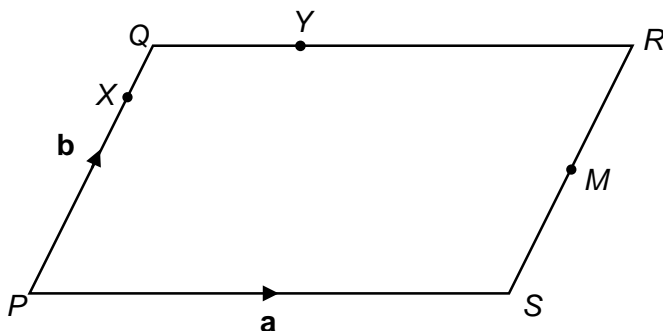
$$\vec{PS} = \mathbf{a}$$

$$\vec{PQ} = \mathbf{b}$$

M is the midpoint of line SR

$$QY : YR = 2 : 3$$

X is in the line PQ



Not drawn
accurately

25 (a) Write down vector \vec{PM} in terms of \mathbf{a} and \mathbf{b}

[1 mark]

Answer _____





Do not write
outside the
box

25 (b) Vectors \vec{PM} and \vec{XY} are parallel.

[4 marks]

Work out the ratio $PX : XQ$

$PX : XQ = \underline{\hspace{2cm}} : \underline{\hspace{2cm}}$

$\frac{\quad}{5}$

Turn over ►





Do not write
outside the
box

26 Work out $9 \sin 60^\circ - \frac{5}{\sqrt{3}}$

Give your answer in the form $\frac{a}{b}\sqrt{3}$ where a and b are integers

[4 marks]

Answer _____

END OF QUESTIONS

$\frac{1}{4}$

